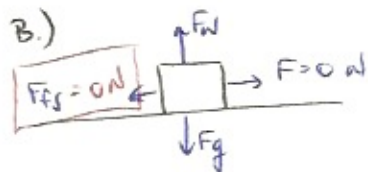


## Friction

### Example 6:

A mystery box ( $m = 10.0 \text{ kg}$ ) rests on a completely horizontal floor. The coefficient of static friction is 0.40 and the coefficient of kinetic friction is 0.30. Determine the following based on the magnitude of a horizontal force ( $F_A$ ) applied to the box:

- Calculate maximum static friction. What is this value?
- $F_A = 0 \text{ N}$
- $F_A = 20 \text{ N}$
- $F_A = 38 \text{ N}$
- $F_A = 40 \text{ N}$



The force of static friction will match any opposing force up to its breaking point at  $39.2 \text{ N}$ .

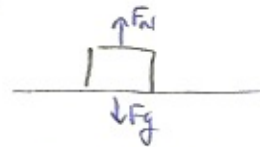
$$F_{fs}^{MAX} = \mu_s \cdot F_N$$

$$\mu_s = 0.40$$

$$F_N = 98 \text{ N}$$

$$F_{fs}^{MAX} = (0.40)(98)$$

$$F_{fs}^{MAX} = 39.2 \text{ N}$$



$$\Sigma F_y = F_N - F_g$$

$$0 = F_N - mg$$

$$0 = F_N - (10.0)(9.8)$$

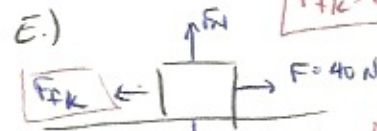
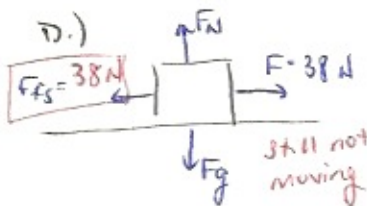
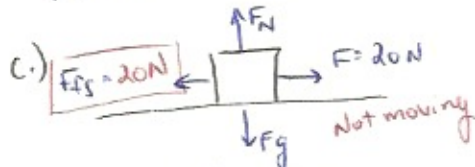
$$0 = F_N - 98$$

$$F_N = 98 \text{ N}$$

$$F_{fk} = \mu_k \cdot F_N$$

$$F_{fk} = (0.30)(98)$$

$$F_{fk} = 29.4 \text{ N}$$



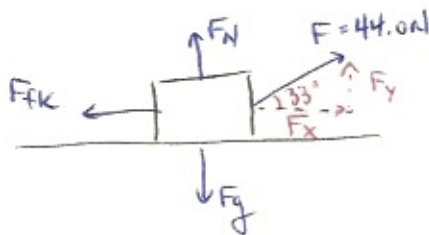
### Example 7:

A little boy is pulling on a toy train that drags behind him at a **constant velocity**. The mass of the toy is 6.50 kg and the boy is pulling with a force of 44.0 N directed at  $33.0^\circ$  above the horizontal.

Equilibrium or Non-equilibrium  $\Sigma F_x$ : Equilibrium  $\Sigma F = 0$

Equilibrium or Non-equilibrium  $\Sigma F_y$ : Equilibrium  $\Sigma F = 0$

- What is the normal force?
- What is the coefficient of kinetic friction?



$$F_x = \cos(33^\circ) \cdot 44.0$$

$$F_x = 36.9 \text{ N}$$

$$F_y = \sin(33^\circ) \cdot 44.0$$

$$F_y = 24.0 \text{ N}$$

$$\Sigma F_x = F_x - F_{fk}$$

$$0 = F_x - F_{fk}$$

$$0 = 36.9 - F_{fk}$$

$$F_{fk} = 36.9 \text{ N}$$

$$F_{fk} = \mu_k \cdot F_N$$

$$36.9 = \mu_k \cdot 39.7$$

$$\mu_k = 0.929$$

$$\Sigma F_y = F_N + F_y - F_g$$

$$0 = F_N + 24.0 - mg$$

$$0 = F_N + 24.0 - (6.50)(9.8)$$

$$0 = F_N + 24.0 - 63.7$$

$$0 = F_N - 39.7$$

$$F_N = 39.7 \text{ N}$$